



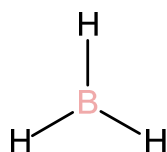
Escuela Politécnica Superior  
Universidad Carlos III de Madrid

Chemistry  
Mid Term Exam. Topics 1-5

1.- (1.5 point) a) (0.8 point) Determine de Lewis structure, lone pairs, molecular geometry and hybridization in the following two molecules  $\text{BH}_3$  and  $\text{NH}_3$ . b) (0.7 point) Discuss the polarity of both molecules and their acid-base properties.

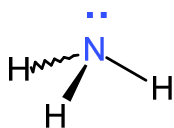
Solution:

a)  $\text{BH}_3$



No lone pairs  
Trigonal Planar geometry  
 $\text{sp}^2$  hybrids

$\text{NH}_3$



One lone pair  
Trigonal pyramidal  
 $\text{sp}^3$

b)  $\text{BH}_3$  : Apolar because the dipolar moment sum is zero. Boron atom has empty p atomic orbitals so the molecule has acid properties

$\text{NH}_3$  : Polar because the dipolar moment sum is non zero. Since it has a lone pair, the molecule has base properties.

2.- (1.5 point) Consider the following statements about electromagnetic radiation and decide whether they are true or false. If they are false correct them

a) (0.3 point) Photons of ultraviolet radiation have less energy than photons of infrared radiation.

b) (0.3 point) The kinetic energy of an electron ejected from a metal surface when the metal is irradiated with ultraviolet radiation is independent of the frequency of the radiation.

c) (0.3 point) The energy of a photon is inversely proportional to the wavelength of the radiation.

d) (0.6 point) A lamp rated at 40 W ( $1\text{W} = 1\text{J}\cdot\text{s}^{-1}$ ) emits blue light of wavelength 470 nm. How many moles of photons of blue light can the lamp generate in 2 seconds?

**DATA:**  $h = 6.626\cdot 10^{-34}\text{ J}\cdot\text{s}$ ;  $c = 2.997\cdot 10^8\text{ m}\cdot\text{s}^{-1}$ ;  $N_A = 6.022\cdot 10^{23}$ .

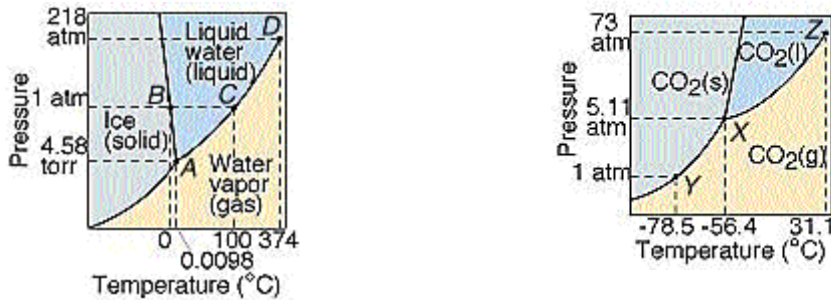
a) False. IR photons have less energy than UV

b) False, kinetic energy of the ejected electron is the difference between the energy of the UV photon and the threshold energy of the metal

c) Correct

d)  $E = h \cdot \nu = h \cdot c / \lambda = 6.626 \cdot 10^{-34} \cdot 2.997 \cdot 10^8 / 470 \cdot 10^{-9} = 4.225 \cdot 10^{-19}$  J. In 2 sec, lamp emits  $2 \cdot 40 = 80$  J. So  $80 = N_{\text{photons}} \cdot 4.225 \cdot 10^{-19}$ ;  $N_{\text{photons}} = 1.893 \cdot 10^{20}$  photons; number of moles will be  $3.144 \cdot 10^{-4}$ .

3.- (1.5 point) Consider the equilibrium phase diagrams of water and carbon dioxide and answer the following questions



<http://www.science.uwaterloo.ca/~cchieh/cact/c123/phasesdgm.html>

- (0.3 point) Which are the coordinates of critical points, triple points and normal boiling points?
- (0.9 point) The slopes for the solid-liquid equilibrium curves have different sign for both substances. Explain why.
- (0.3 point) Describe all the changes that will take place if the pressure of a sample of water at 0°C is decreased from 218 atm to 0.1 torr.

Solution:

a) H<sub>2</sub>O. Critical point 218 atm, 374 °C; triple point 4.58 torr, 0.0098 °C; normal boiling temperature 100 °C

CO<sub>2</sub>. Critical point 73 atm, 31 °C; triple point 5.11 atm, -56.4 °C; it has no normal boiling temperature because at 1 atm it is a gas.

b) According to the Clausius equation the slope for the coexistence equilibrium line is given by

$$\frac{dp}{dT} = \frac{\Delta H}{T \Delta V_{S-L}} = \frac{\Delta H_V}{T(V_L - V_S)} = \frac{\Delta H_V}{T \left( \frac{m}{\rho_L} - \frac{m}{\rho_S} \right)}$$

For water, the density of the solid is smaller than for the liquid so the slope is negative. But this is not the case for carbon dioxide which has a positive slope.

c) From 218 to 1 atm, water exists as a liquid. At 1 atm, it transforms in solid and remains as a solid until pressure reaches a value around 4 torr. Then water sublimates and transforms into gas remaining as a gas until P = 0.1 torr.

4.- (1.5 point) Vapor pressure of benzene and ethanol at 50°C are: 271 and 220 Torr respectively. a) (0.5 point) Calculate the vapor pressure of a mixture containing the same weights of both substances at 50°C as well as, b) (0.5 point) the molar fraction of ethanol in the vapor phase assuming ideal behavior. c) (0.5 point) Vapor pressure of the mixture at 50 °C was measured in an experiment and it was obtained a value of 300 torr. Compare with your result and extract the sign of the enthalpy of mixing both substances. Will the mixture present an azeotropic composition?

**DATA:** M(ethanol)=46 g/mol, M(benzene)=78g/mol.

**Solution**

$$X_{\text{ethanol}} = \frac{xg \cdot \frac{1\text{mol}}{46g}}{xg \cdot \frac{1\text{mol}}{46g} + xg \cdot \frac{1\text{mol}}{78g}} = 0.629$$

$$X_{\text{benzene}} = 1 - 0.629 = 0.371$$

**Raoult's law:**  $p_i = X_i p_i^0$

$$p_{\text{ethanol}} = 0.629 \cdot 220\text{Torr} = 138.38\text{Torr}$$

$$p_{\text{benzene}} = 0.371 \cdot 271\text{Torr} = 100.54\text{Torr}$$

**Dalton's law:**  $p = \sum_i p_i$

$$p = 138.38 + 100.54 = 238.92\text{Torr}$$

**b) Dalton's law:**  $p_i = Y_i \cdot p$

$$Y_{\text{ethanol}} = \frac{p_{\text{ethanol}}}{p} = \frac{138.38\text{Torr}}{238.92\text{Torr}} = 0.579$$

c) The mixture has a higher vapor pressure than ideal behavior so the mixing enthalpy will be positive and the mixture will present an azeotrope with minimum boiling temperature

**5.- (2 points)** Citric acid ( $\text{AH}_3$ ) is an organic triprotic acid. The pair  $[\text{AH}^{2-}]/[\text{A}^{3-}]$  is commonly used as a buffer in biochemistry. An enzymatic reaction takes place in 10 mL of a buffered solution with total buffer concentration of 0.12 M and initial pH of 7; during the reaction  $2 \cdot 10^{-4}$  mol of an acid are generated. Determine: (a) (0.8 points) the initial concentration of the two citrate species forming the buffer, (b) (0.8 points) the pH at the end of the enzymatic reaction, and (c) (0.4 points) the pH at the end of the enzymatic reaction without using a buffer solution.

**DATA:**  $\text{pK}(\text{AH}^{2-}) = 6.4$

**Solution:**



$$K_a = \frac{[\text{A}^{3-}][\text{H}_3\text{O}^+]}{[\text{AH}^{2-}]}; [\text{H}_3\text{O}^+] = K_a \frac{[\text{AH}^{2-}]}{[\text{A}^{3-}]}; \text{pH} = \text{pK}_a - \log\left(\frac{[\text{AH}^{2-}]}{[\text{A}^{3-}]}\right)$$

$$\log\left(\frac{[\text{AH}^{2-}]}{[\text{A}^{3-}]}\right) = 6.4 - 7 = -0.6; \frac{[\text{AH}^{2-}]}{[\text{A}^{3-}]} = 0.2511$$

$0.12 = [\text{AH}^{2-}] + [\text{A}^{3-}]$  and  $\frac{[\text{AH}^{2-}]}{[\text{A}^{3-}]} = 0.2511$  We have a pair of equations that can be solved  
 $[\text{A}^{3-}] = 9.59 \cdot 10^{-2}$  M and  $[\text{AH}^{2-}] = 2.41 \cdot 10^{-2}$ .

b)  $\text{pH} = \text{pK}_a - \log\left(\frac{[\text{AH}^{2-}]}{[\text{A}^{3-}]}\right) = \text{pK}_a - \log\left(\frac{[\text{AH}^{2-}] + (2 \cdot 10^{-4}/10^{-2})}{([\text{A}^{3-}] - (2 \cdot 10^{-4}/10^{-2}))}\right) = 6.4 - \log(4.41/7.59) = 6.63.$

c)  $[\text{H}_3\text{O}^+] = 2 \cdot 10^{-4}/10^{-2} = 0.02\text{M}$   $\text{pH} = 1.698$

**6.- (2 point)** The molar enthalpy of fusion of benzene is 0.9 kJ/mol. Benzene normal melting point is 5.5 °C.  $C_p$  (in J/mol·K) values of benzene in the solid and liquid states are 118.4 and 134.8 respectively. Calculate: (a) (1.5 point) the benzene entropy and enthalpy changes when 1 mol of benzene is heated from -20°C to 50°C; (b) (0.5 point) the free energy change for the solid→liquid process at -20°C, 5.5 °C and 50 °C and discuss the physical meaning of the obtained values.

**Solution:**                    1                    2                    3



$$DS1 = C_p \ln(T_m/T_1) = 118.4 \ln((273.15 + 5.5)/(273.15 - 20)) = 11.363 \text{ J/K}$$
$$DH1 = C_p(T_m - T_1) = 118.4(25.5) = 3019.2 \text{ J}$$

$$DS2^\circ = DH2^\circ/T_m = 3.23 \text{ J/K}$$
$$DH2^\circ = 900 \text{ J}$$

$$DS3 = C_p \ln(T_2/T_m) = 134.5 \ln(273.15 + 50)/(273.15 + 5.5) = 19.93 \text{ J/K}$$
$$DS4 = C_p(T_2 - T_m) = 134.5(44.5) = 5998.6 \text{ J}$$

$$DS = 34.522 \text{ J/K}$$

$$DH = 9917.8 \text{ J}$$

$$b) DG(-20^\circ\text{C}) = DH2^\circ - TDS2^\circ = 900 - (273.15 - 20)3.23 = 82.58 \text{ J}$$

$$DG(5.5^\circ\text{C}) = DH2^\circ - TDS2^\circ = 900 - (273.15 + 5.5)3.23 = 0 \text{ J}$$

$$DG(50^\circ\text{C}) = DH2^\circ - TDS2^\circ = 900 - (273.15 + 50)3.23 = -143.8 \text{ J}$$